






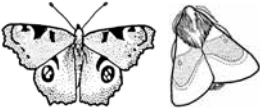






W4

Comparing two habitats



To investigate if there is a difference in the number and species of minibeast that live in two different habitats. Fill in the prediction below and then investigate. Finally decide if your prediction is true or false.

I **predict** that in the _____ (woodland or grassland) habitat I will find more minibeasts **because** _____

Minibeast (remember to tally count)	A Woodland	B Grassland
grasshopper 		
centipede 		
spider 		
beetle 		
ladybird 		
butterfly or moth 		
woodlouse 		
fly 		
snail 		
slug 		
bee 		
froghopper 		
other		

My prediction was true/false (circle correct one)